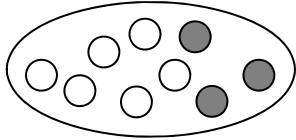
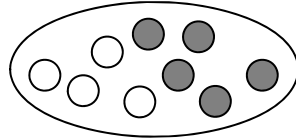


Übungen zur Zahl 9

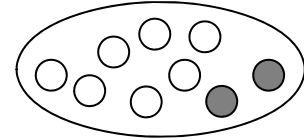
1 Finde die Plusaufgabe!



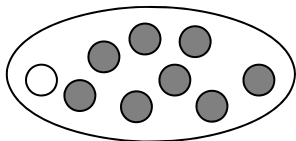
$$9 = 6 + 3$$



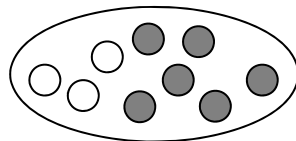
$$9 = _ + _$$



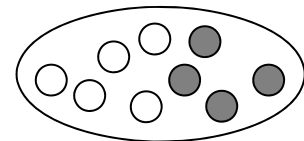
$$9 = _ + _$$



$$9 = _ + _$$



$$9 = _ + _$$



$$9 = _ + _$$

2 Rechne im Kopf!

$$9 = 7 + _$$

$$9 = 2 + _$$

$$9 = 1 + _$$

$$9 = 4 + _$$

$$9 = 8 + _$$


$$9 = 3 + _$$

$$9 = 6 + _$$

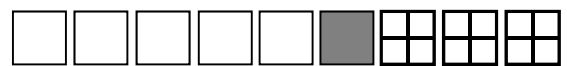
$$9 = 9 + _$$

$$9 = 5 + _$$

3 Zerlege die Zahl 9!



$$9 = 3 + 4 + 2$$



$$9 = _ + _ + _$$



$$9 = _ + _ + _$$



$$9 = _ + _ + _$$

④ Zerlege im Kopf!

$9 = 4 + 1 + \underline{\quad}$

$9 = 5 + \underline{\quad} + 2$

$9 = \underline{\quad} + 4 + 1$

$9 = 2 + 2 + \underline{\quad}$

$9 = 2 + \underline{\quad} + 3$

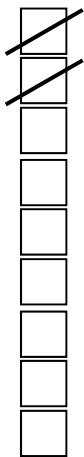
$9 = \underline{\quad} + 2 + 5$

$9 = 1 + 7 + \underline{\quad}$

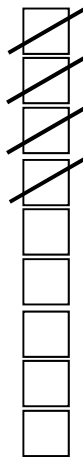
$9 = 8 + \underline{\quad} + 0$

$9 = \underline{\quad} + 6 + 1$

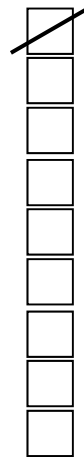
⑤ Finde die Minusaufgabe!



$9 - 2 = 7$



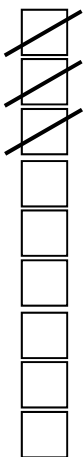
$9 - 4 = \underline{\quad}$



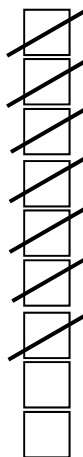
$9 - 1 = \underline{\quad}$



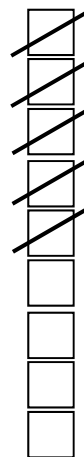
$9 - 6 = \underline{\quad}$



$9 - \underline{\quad} = \underline{\quad}$



$9 - \underline{\quad} = \underline{\quad}$

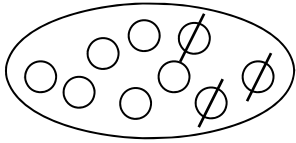


$9 - \underline{\quad} = \underline{\quad}$

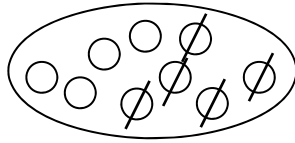


$9 - \underline{\quad} = \underline{\quad}$

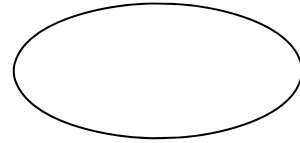
⑥ Streiche weg und rechne!



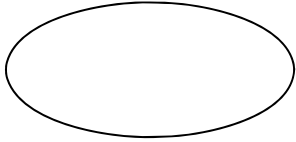
$$9 - 3 = \underline{\quad}$$



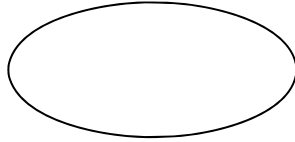
$$9 - 5 = \underline{\quad}$$



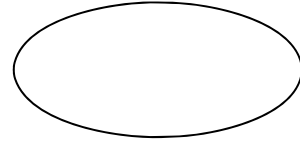
$$9 - 7 = \underline{\quad}$$



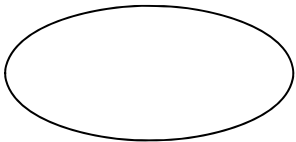
$$9 - 6 = \underline{\quad}$$



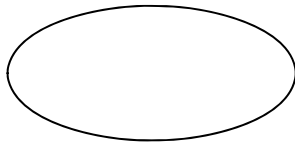
$$9 - 2 = \underline{\quad}$$



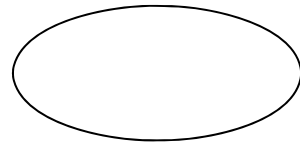
$$9 - 4 = \underline{\quad}$$



$$9 - 1 = \underline{\quad}$$



$$9 - 8 = \underline{\quad}$$



$$9 - 0 = \underline{\quad}$$

⑦ Rechne im Kopf!

$$9 - 5 = \underline{\quad}$$

$$9 - 9 = \underline{\quad}$$

$$9 - 3 = \underline{\quad}$$

$$9 - 2 = \underline{\quad}$$

$$9 - 1 = \underline{\quad}$$

$$9 - 8 = \underline{\quad}$$

$$9 - 7 = \underline{\quad}$$

$$9 - 4 = \underline{\quad}$$

$$9 - 6 = \underline{\quad}$$

$$9 - 4 = \underline{\quad}$$

$$9 - 0 = \underline{\quad}$$

$$9 - 9 = \underline{\quad}$$

$$9 - 3 = \underline{\quad}$$

$$9 - 7 = \underline{\quad}$$

$$9 - 5 = \underline{\quad}$$

$$9 - 1 = \underline{\quad}$$

$$9 - 2 = \underline{\quad}$$

$$9 - 0 = \underline{\quad}$$

Weitere Übungen finden Sie in der Übungsreihe **Rechnen bis 20, 1. Klasse**